

Extensions Unit, Station 4, Round 2, Task 2


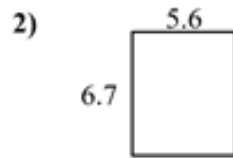


Finding Perimeter with Decimals

Name: **Answer Key**

Find the perimeter of each figure. Each figure is in centimeters (cm). Not to scale.

Answers

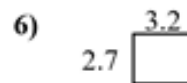
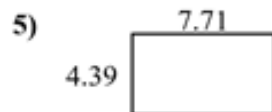
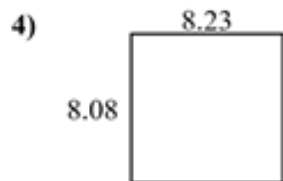


1. 26.42 cm

2. 24.6 cm

3. 23.36 cm

4. 32.62 cm



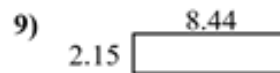
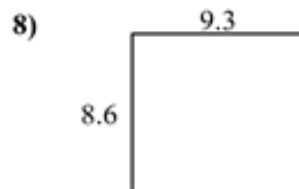
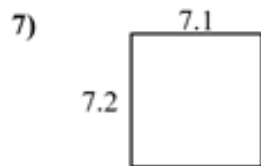
5. 24.2 cm

6. 11.8 cm

7. 28.6 cm

8. 35.8 cm

9. 21.18 cm



10. 22.2 cm

11. 24.78 cm

12. 14.7 cm

13. 15.08 cm

14. 29.24 cm

15. 18.6 cm

